

# Env - Std - 4


Q:1 Identify the picture and write name of seasons.

1]



[ ]

2]



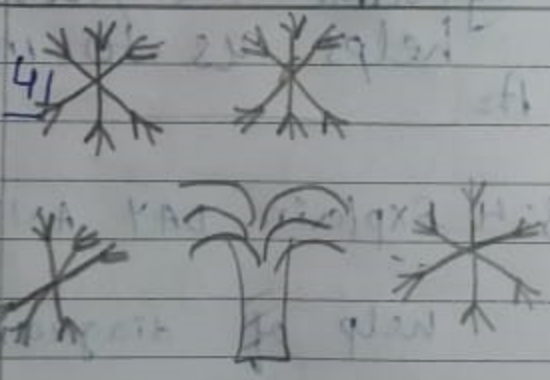
[ ]

3]



[ ]

4]



[ ]

Q:2 Match the pair.

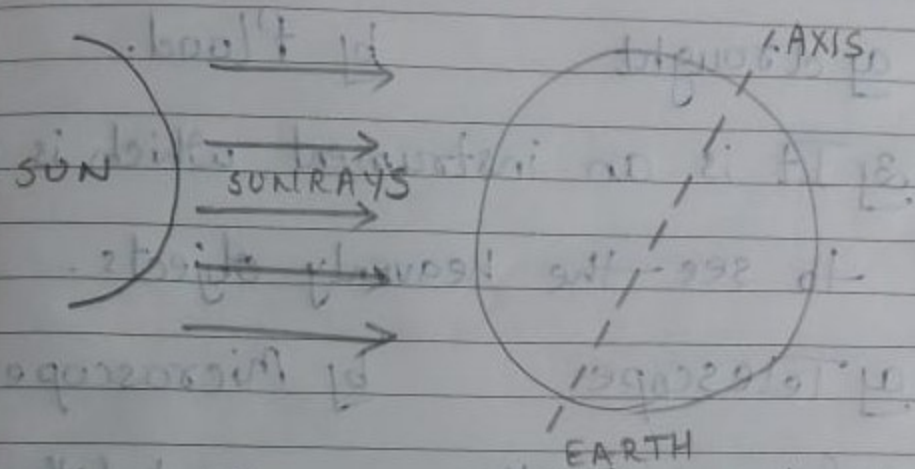
A

B

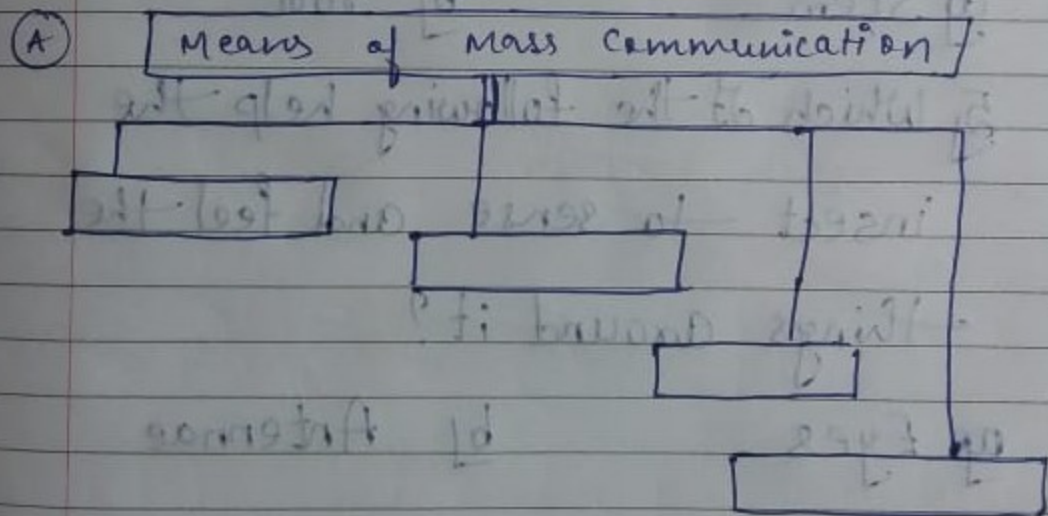
- 1] Soluble Object
- 2] Insoluble Object
- 3] Floatable Object
- 4] Linkable Object

- a] Oil
- b] Medicine tablet
- c] Scissors
- d] Boat

darkness . causing night .



Q:5 Complete the following webchart:



Q:6 Tick the correct answer.

There are \_\_\_\_\_ planets in the solar system.

a) Eight

b) Nine

Q: 3 Answer in one word.

a) What is skeleton formed of?

A= bones

b) What is the process of giving birth to young ones called?

A= reproduction

c) Name the process by which plants make their food.

A= photosynthesis

d) Name the part of our body that helps us to move.

A= Muscles

Q: 4 Explain DAY AND NIGHT with the help of diagrams:

A) As the earth rotates, the part of the earth that faces the sun, receives light causing day time. The part which does not face the sun, is in

1] Too much rain causes.

a) drought                      b) flood.

2] It is an instrument which is used to see the heavenly objects.

a) Telescope                      b) Microscope.

3] Ginger is the \_\_\_\_\_ part of the plant

a) Stem                              b) root

4] Which of the following help the insect to sense and feel the things around it?

a) Eyes                              b) Antennae