

S.K.R.M SCHOOL STD (UKG)

MATH

Q.1 Solve:

$$\begin{array}{r} 2 \\ + 2 \\ \hline \end{array}$$

$$\begin{array}{r} 3 \\ - 0 \\ \hline \end{array}$$

$$\begin{array}{r} 5 \\ + 1 \\ \hline \end{array}$$

$$\begin{array}{r} 8 \\ - 3 \\ \hline \end{array}$$

$$\begin{array}{r} 9 \\ + 1 \\ \hline \end{array}$$

$$\begin{array}{r} 7 \\ - 4 \\ \hline \end{array}$$

$$\begin{array}{r} 4 \\ + 4 \\ \hline \end{array}$$

$$\begin{array}{r} 6 \\ - 1 \\ \hline \end{array}$$

Q.2 Fill the missing numbers:

➤ 21 _____ 24 _____ 28 _____

➤ 52 _____ 54 _____ 57 _____ 60 _____


➤ 70 _____ 73 _____ 75 _____ 77 _____

➤ 91 92 _____ 95 _____ 98 99 _____


Student's name :-

Read the spelling and draw the picture given below

Day



Night




Happy




Sad



In




Out



Empty



Full



OPPOSITE

WORDS